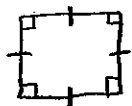
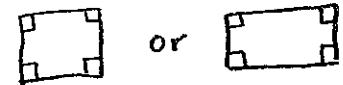
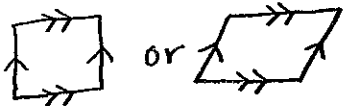
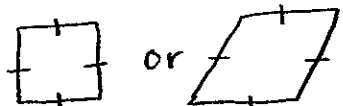
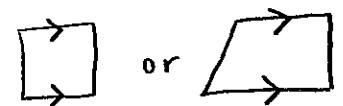
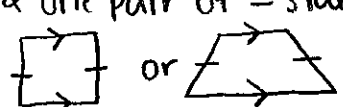
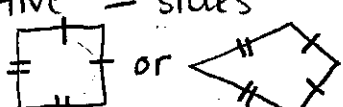
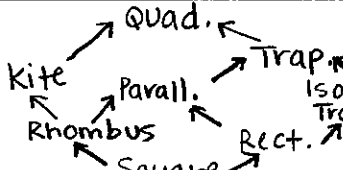


Quadrilaterals Flashcards

You will need 4 index cards for this project. Cut each index card in half so that you now have 8 small flashcards. Follow the instructions below for the front and back of each flashcard.

Front of Index Card	Back of Index Card
Square	4 right angles & 4 \cong sides 
Rectangle	4 right angles 
Parallelogram	2 pairs of // sides 
Rhombus	4 \cong sides 
Trapezoid	one pair of // sides 
Isosceles Trapezoid	one pair of // sides & one pair of \cong sides 
Kite	2 pairs of consecu- tive \cong sides 
Quadrilateral Hierarchy	

Once you are finished creating your flashcards, use them to **study** for the quiz over this material! Put them in an envelope for safe keeping and keep them until the Chapter 6 Test so you can use them to study then as well!